


Worksheets to print out from [sofatutor.com](https://www.sofatutor.com)

# Regrouping Ones, Tens, and Hundreds



- 1 How many tens rods are needed to regroup to a hundreds flat?
- 2 How many ones blocks are needed to regroup to a tens rod?
- 3 Look at each picture and decide how to regroup.
- 4 Use what you know to regroup the blocks in the picture below.
- 5 How can you regroup the hundreds?
- 6 Use what you know to regroup the blocks in the picture below.
- + with many hints, answer keys, and solution approaches for all tasks






The complete package, **including all tasks, hints, solutions, and solution approaches**, is available to all subscribers of [sofatutor.com](https://www.sofatutor.com)

## How many tens rods are needed to regroup to a hundreds flat?

Highlight the number of tens you need.



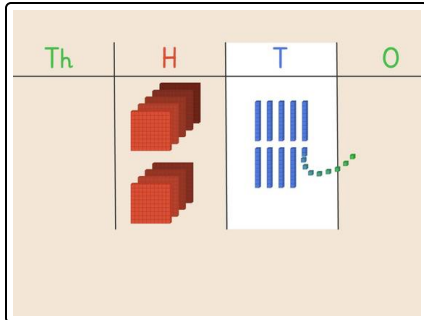
Th	H	T	O
			

## Our hints for the tasks

1  
from 6

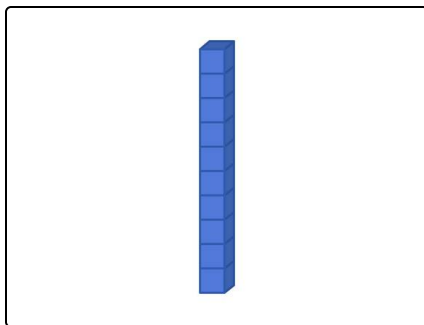
### How many tens rods are needed to regroup to a hundreds flat?

#### 1. Hint



- **10 ones** are the same amount as **1 ten**.
- How many **tens** are the same amount as **1 hundred**?

#### 2. Hint



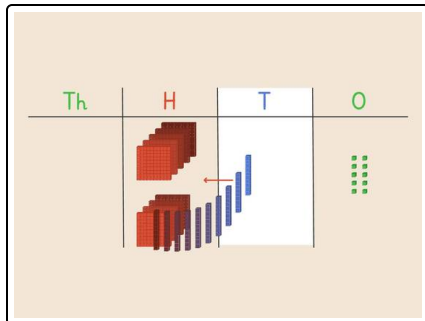
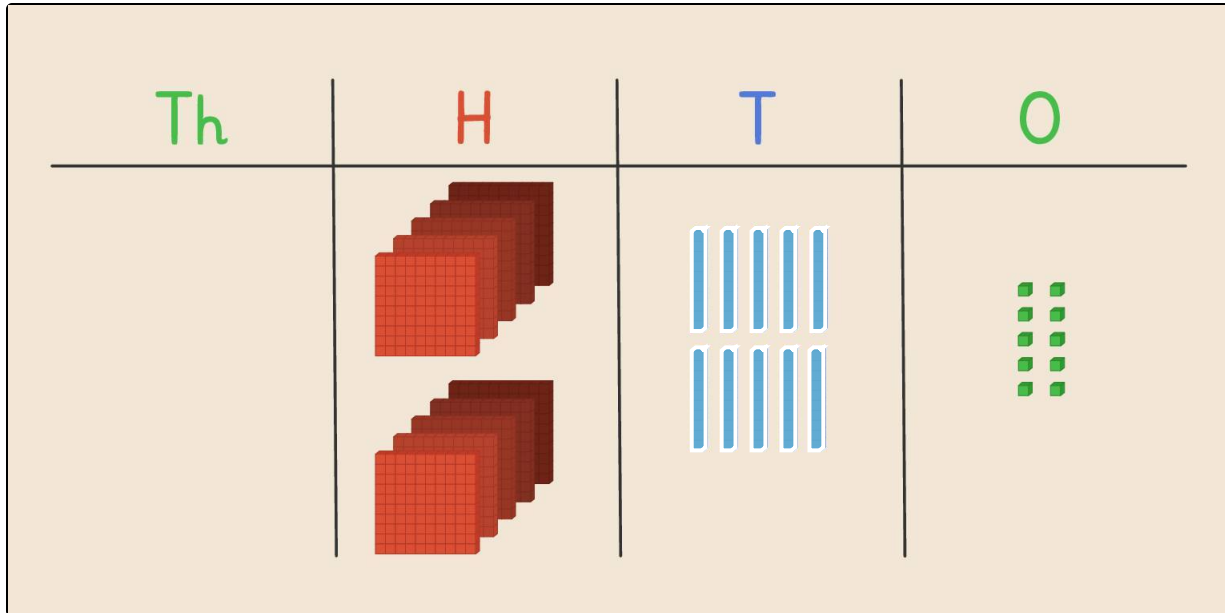
- This is **1 tens block**.
- How many of these do you need to highlight to equal **1 hundred**?

## Solutions and solution approaches for the tasks

1  
from 6

How many tens rods are needed to regroup to a hundreds flat?

 ten



You need **10 tens** rods to regroup to *1 hundreds* flat.