


Worksheets to print out from [sofatutor.com](https://www.sofatutor.com)

Partitioning Rectangles



- 1 Equal sized squares.
- 2 How do we cut the cake?
- 3 How many pieces?
- 4 Are they equal sized squares?
- 5 How can we make eight equal pieces?
- 6 How many pieces of cake are made?
- + with many hints, answer keys, and solution approaches for all tasks

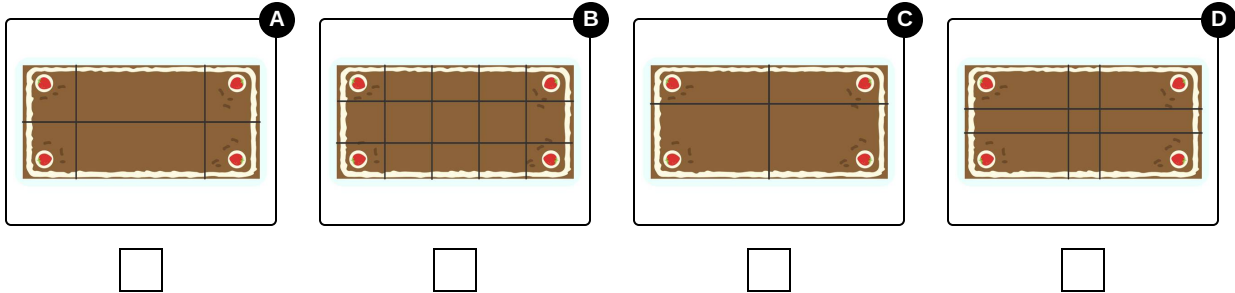


The complete package, **including all tasks, hints, solutions, and solution approaches**, is available to all subscribers of [sofatutor.com](https://www.sofatutor.com)

Equal sized squares.

Select the cake that has been divided into equal squares.

Nico and Nia have 4 cakes that have all been sliced differently. Which one has been cut into **equal sized squares**?



Our hints for the tasks



Equal sized squares.

1. Hint

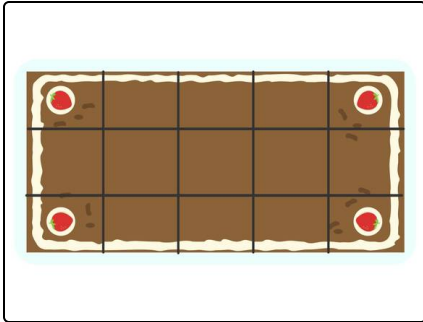
Equal sized squares means that each piece of cake needs to be the **same size**.

Solutions and solution approaches for the tasks

1
from 6

Equal sized squares.

Answer key: B



This cake has been divided into **square pieces** that are all **equal in size**.