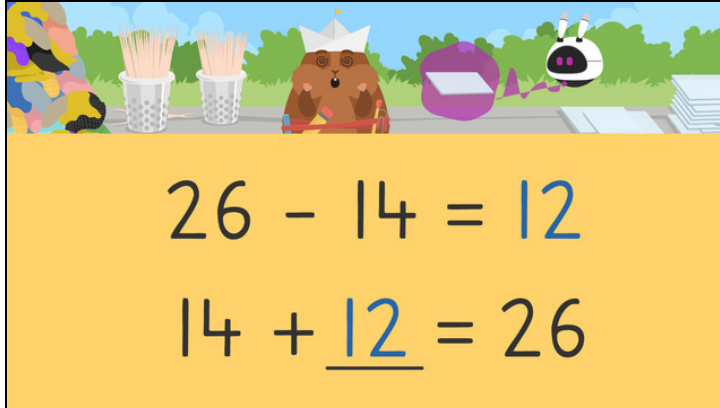


Worksheets to print out from [sofatutor.com](https://www.sofatutor.com)

# Subtract Using Addition on a Number Line



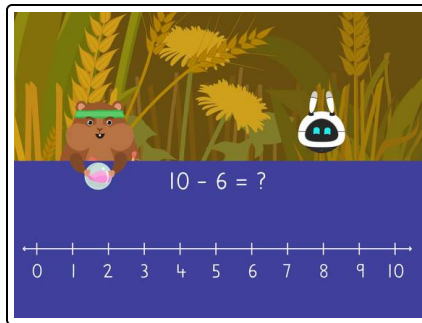
- 1 Count up using the number line.
- 2 Select the addition equation that answers the question below.
- 3 Fill in the blanks.
- 4 Match the subtraction equations with the equal addition equations.
- 5 Help Imani and Mr. Squeaks with their hopscotch game.
- 6 Which friends can go?
- + with many hints, answer keys, and solution approaches for all tasks



The complete package, **including all tasks, hints, solutions, and solution approaches**, is available to all subscribers of [sofatutor.com](https://www.sofatutor.com)

## Count up using the number line.

Select the correct answer.



Mr. Squeaks and Imani are playing a bouncing game on the number line. The ball bounced on 10 and then back to 6. How many numbers did it skip? Count up to solve.

☐  **A**☐  **B**☐  **C**☐  **D**

## Our hints for the tasks

1  
from 6


### Count up using the number line.

#### 1. Hint

Begin at 6 and count up until you reach 10.

---

#### 2. Hint



Count the jumps.


---

## Solutions and solution approaches for the tasks

1  
from 6

### Count up using the number line.

Answer key: B



Begin with the smaller number 6 and count forward 4 to reach 10.