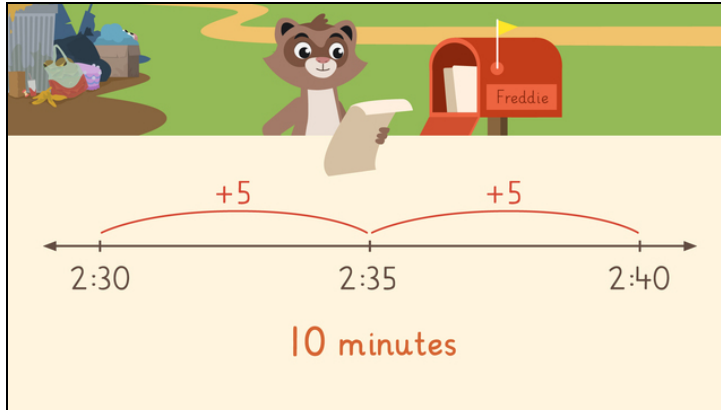


Worksheets to print out from [sofatutor.com](https://www.sofatutor.com)

Adding and Subtracting Time



- 1 Can you order the steps for adding and subtracting time?
- 2 What time will Freddie get home?
- 3 Can you figure out the missing times?
- 4 Can you solve the addition and subtraction problems?
- 5 Can you check Zuri's times?
- 6 Can you solve Freddie's puzzle?
- + with many hints, answer keys, and solution approaches for all tasks



The complete package, **including all tasks, hints, solutions, and solution approaches**, is available to all subscribers of [sofatutor.com](https://www.sofatutor.com)

Can you order the steps for adding and subtracting time?

Place the steps in the correct order with **addition first** and then subtraction.



Place the time on the **right** of the number line.

To **add** time...

To **subtract** time...

Count **backward** and find the time.

Place the start time on the **left** of the number line.

Count **forward** and find the time.

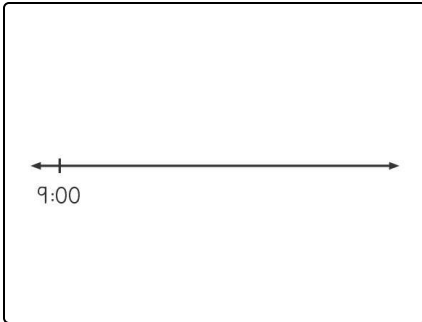
CORRECT ORDER

Our hints for the tasks

1
from 6

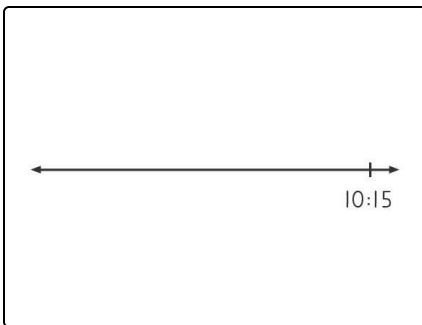
Can you order the steps for adding and subtracting time?

1. Hint



If we're adding time, we start like this on the number line.

2. Hint



If we're subtracting time, we start like this on the number line.

Solutions and solution approaches for the tasks



Can you order the steps for adding and subtracting time?

Answer key: B, E, F, C, A, D

To **add** time:

- Put the start time on the **left** of the number line.
- Count **forward** and find the time.

To **subtract** time:

- Put the time on the **right** of the number line.
- Count **backward** and find the time.