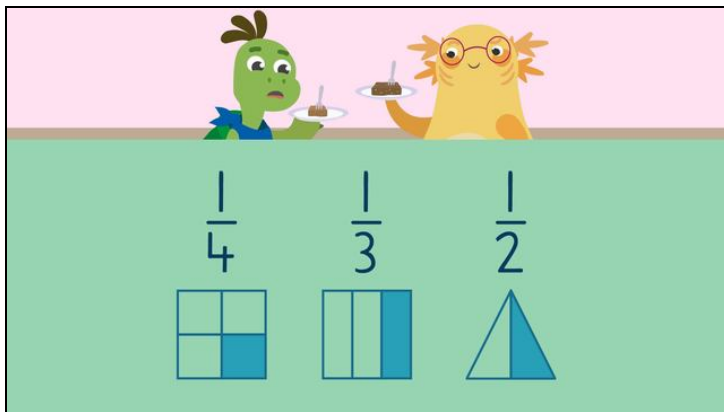




Worksheets to print out from [sofatutor.com](https://www.sofatutor.com)

# Unit fractions



- 1 What is a unit fraction?
- 2 Which pies represent unit fractions?
- 3 How much fudge will each friend get?
- 4 Matching unit fractions.
- 5 Who has the biggest piece of fudge?
- 6 Pizza night.
- + with many hints, answer keys, and solution approaches for all tasks




The complete package, including all tasks, hints, solutions, and solution approaches, is available to all subscribers of [sofatutor.com](https://www.sofatutor.com)



## What is a unit fraction?

Highlight the unit fraction.



Axel and Tank are trying to remember what a unit fraction is.



Unit fraction

$$\frac{1}{7}$$

$$\frac{2}{3}$$



## Our hints for the tasks

1  
from 6

### What is a unit fraction?

#### 1. Hint

Unit fractions have 1 as the numerator.

---

#### 2. Hint

The numerator is the top part of the fraction.

---



## Solutions and solution approaches for the tasks

1  
from 6

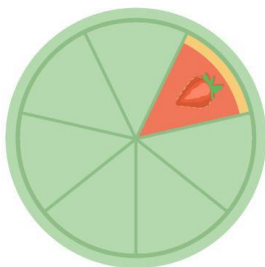
### What is a unit fraction?



Unit fraction

$$\frac{1}{7}$$

$$\frac{2}{3}$$



The unit fraction is  $\frac{1}{7}$  since there is a 1 in the numerator.