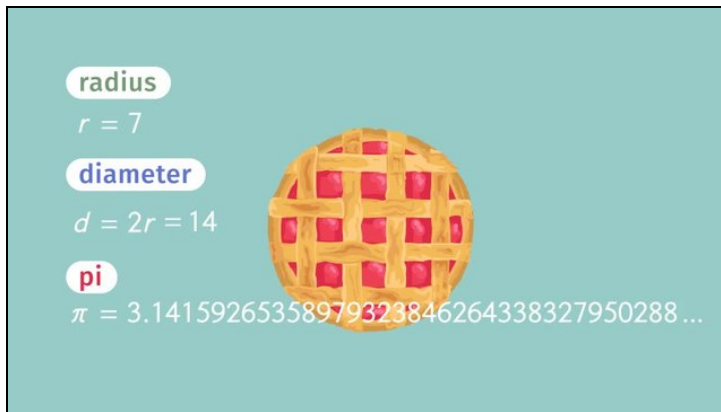




Printable Worksheets from [sofatutor.com](https://www.sofatutor.com)

All About Pi



- 1 Determine which numbers are rational and which numbers are irrational.
- 2 Identify the different parts of a circle.
- 3 Calculate area and circumference of the given circles.
- 4 Identify true statements about circles and π .
- 5 Calculate the distance traveled by the delivery truck.
- 6 Determine the different measurements of the Ferris wheel.
- + with lots of tips, answer keys, and detailed answer explanations for all of the problems.



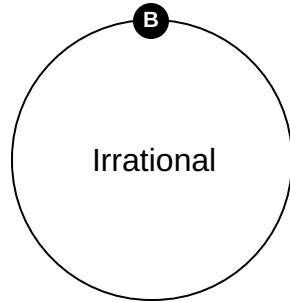
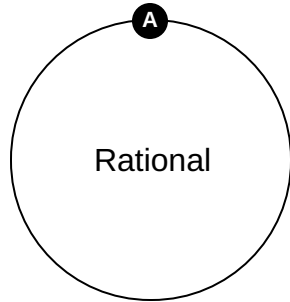
The complete package, including all problems, hints, answers, and detailed answer explanations is available for all [sofatutor.com](https://www.sofatutor.com) subscribers.



Determine which numbers are rational and which numbers are irrational.

Assign numbers to rational or irrational.

0.347892...	1	-5	2	0.03003...	3	π	4
0.333333	5	2.71828...	6	-0.275	7	3.1415926...	8
$\frac{1}{9}$	9	$-\frac{2}{3}$	10				





Hints for solving these problems

1
of 6

Determine which numbers are rational and which numbers are irrational.

Hint #1

A rational number can be written as a fraction where both the numerator and denominator are integers.

Hint #2

A irrational number cannot be expressed as a fraction.

Hint #3

Rational Numbers:

- 5 , $\frac{1}{2}$, -2 , $-\frac{7}{8}$

Irrational Numbers:

- $0.07007\dots$, $0.78788\dots$
-



Answers and detailed answer explanations for these problems

1
of 6

Determine which numbers are rational and which numbers are irrational.

Answer key: A: 2, 5, 7, 9, 10 // B: 1, 3, 4, 6, 8

A **rational number** is a number that can be written as a fraction where both the numerator and denominator are integers, and the denominator is not zero:

- $\frac{1}{9}$, -5 , $-\frac{2}{3}$, -0.275 , 0.333333

An **irrational number** cannot be expressed as a fraction between two integers. Instead, the decimal expansion goes on forever:

- π , $0.03003\dots$, $0.347892\dots$, $2.71828\dots$, $3.1415926\dots$