


Worksheets to print out from [sofatutor.com](https://www.sofatutor.com)

Fractions Greater than 1 on a Number Line



- 1 Mixed numbers.
- 2 Identify fractions greater than one on a number line.
- 3 Racing seahorses!
- 4 Matching improper fractions and mixed numbers.
- 5 Identify the seahorses on the number line.
- 6 Convert between improper fractions and mixed numbers.
- + with many hints, answer keys, and solution approaches for all tasks



The complete package, including all tasks, hints, solutions, and solution approaches, is available to all subscribers of [sofatutor.com](https://www.sofatutor.com)

Mixed numbers.

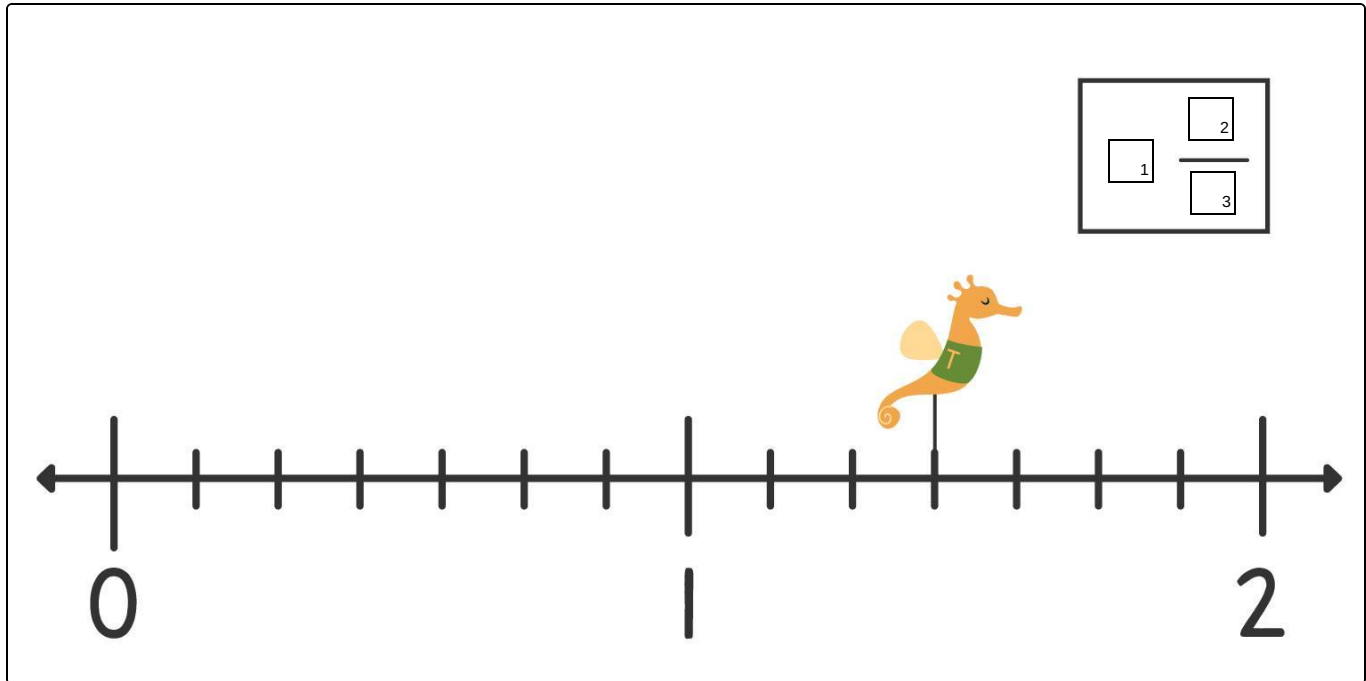
Fill in the blanks to complete the mixed number.

This time, Tank's seahorse is in the lead! But he needs to read this as a mixed number. Fill in the gaps with the correct mixed number.

7

3

1

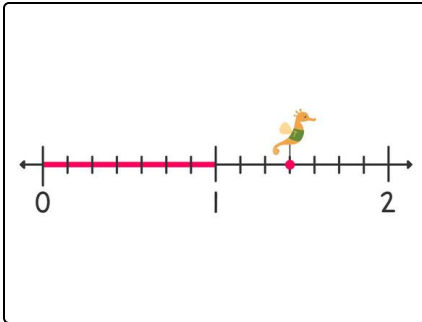


Our hints for the tasks

1
from 6

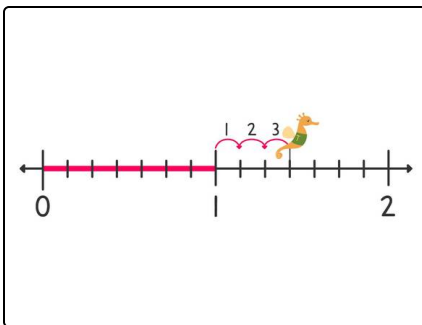
Mixed numbers.

1. Hint



First, look at how many wholes the seahorse has travelled.

2. Hint



Then, look at how many more spaces the seahorse has traveled.

Solutions and solution approaches for the tasks



Mixed numbers.

Answer key: 1: 1 // 2: 3 // 3: 7

Tank's seahorse has reached $1\frac{3}{7}$. It has traveled **one whole** plus **3 more jumps**, and **each whole is made of 7 parts**.